



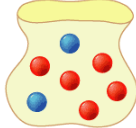



1) Place these terms in order of likelihood along the continuum

likely	certain	equal chance	no chance
impossible	fifty-fifty	unlikely	100%



<p>A fair coin landing on heads</p> 	<p>Choosing a blue marble</p> 	<p>Choosing a blue marble</p> 	<p>Choosing a red marble</p> 	<p>Choosing a red marble</p> 	<p>Rolling a 7 on a regular 6-sided dice</p> 
---	---	--	--	--	--

2) Match these events to their likelihood of occurring

3) Include any additional information

- Can you assign a probability (a number value) to each event?
- Can you list any other events that match any of the chance terms?